






Hvor langt er der til hønemors kyllinger?

Skriv målene og læg sammen

| | Ark 1 | Ark 2 | Ark 3 |
|---|---|--|---|
|  | $\begin{array}{r} + \\ \hline \square \square \\ \hline \square \square \text{ cm} \\ \hline \hline \end{array}$ | $\begin{array}{r} + \\ \hline \square \square \\ \hline \square \square \text{ cm} \\ \hline \hline \end{array}$ | $\begin{array}{r} + \\ \hline \square \square \\ \square \square \\ \hline \square \square \text{ cm} \\ \hline \hline \end{array}$ |
|  | $\begin{array}{r} + \\ \hline \square \square \\ \hline \square \square \text{ cm} \\ \hline \hline \end{array}$ | $\begin{array}{r} + \\ \hline \square \square \\ \hline \square \square \text{ cm} \\ \hline \hline \end{array}$ | $\begin{array}{r} + \\ \hline \square \square \\ \square \square \\ \hline \square \square \text{ cm} \\ \hline \hline \end{array}$ |
|  | $\begin{array}{r} + \\ \hline \square \square \\ \hline \square \square \text{ cm} \\ \hline \hline \end{array}$ | $\begin{array}{r} + \\ \hline \square \square \\ \hline \square \square \text{ cm} \\ \hline \hline \end{array}$ | $\begin{array}{r} + \\ \hline \square \square \\ \hline \square \square \text{ cm} \\ \hline \hline \end{array}$ |
|  | $\begin{array}{r} + \\ \hline \square \square \\ \hline \square \square \text{ cm} \\ \hline \hline \end{array}$ | $\begin{array}{r} + \\ \hline \square \square \\ \hline \square \square \text{ cm} \\ \hline \hline \end{array}$ | $\begin{array}{r} + \\ \hline \square \square \\ \hline \square \square \text{ cm} \\ \hline \hline \end{array}$ |
|  | $\begin{array}{r} + \\ \hline \square \square \\ \square \square \\ \hline \square \square \text{ cm} \\ \hline \hline \end{array}$ | $\begin{array}{r} + \\ \hline \square \square \\ \hline \square \square \text{ cm} \\ \hline \hline \end{array}$ | $\begin{array}{r} + \\ \hline \square \square \\ \hline \square \square \text{ cm} \\ \hline \hline \end{array}$ |

