

Hvor mange is? Skriv tallet 1 til 10

5 colorful ice cream bars + 5 colorful ice cream bars =

4 chocolate ice cream bars + 4 chocolate ice cream bars =

5 colorful ice cream bars + 1 colorful ice cream bar =

3 ice cream cones + 3 ice cream cones =

4 ice cream sandwiches + 4 ice cream sandwiches =

©www.printland.dk

Hvor mange is? Skriv tallet 1 til 10

5 pink ice cream bars + 5 pink ice cream bars =

4 watermelon ice cream bars + 4 watermelon ice cream bars =

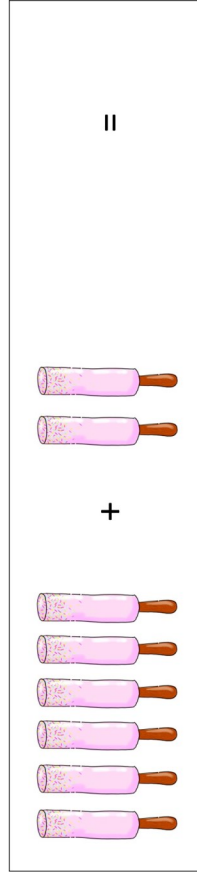
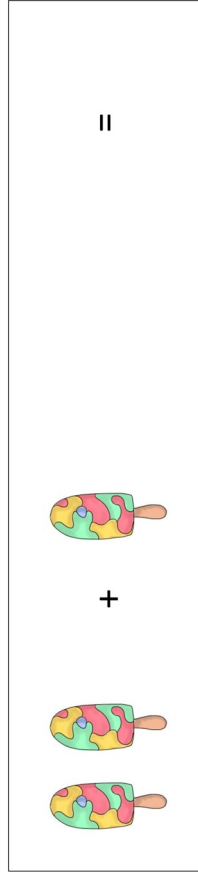



4 chocolate ice cream bars + 1 chocolate ice cream bar =

5 ice cream cones + 5 ice cream cones =

2 colorful ice cream bars + 2 colorful ice cream bars =

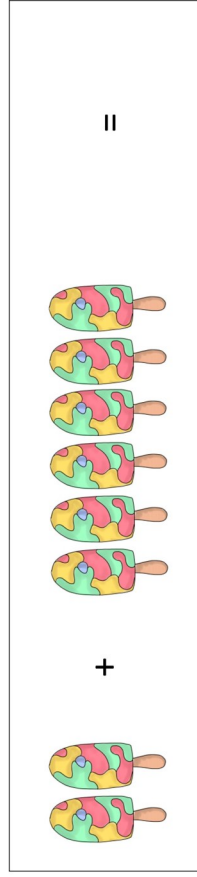

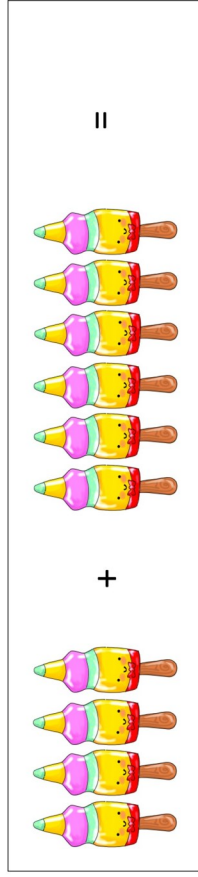


©www.printland.dk

Hvor mange is? Skriv tallet 1 til 10



©www.printland.dk

Hvor mange is? Skriv tallet 1 til 10



©www.printland.dk