




20
km

RACE



Racerbilen har 20 km til mål.
Læg sammen og find vejen til målet.



MÅL

START

17+2

9+11

3+12

6+14

8+8

6+13

18+2

4+13

20+0

6+8

3+17

12+5

7+13

9+8

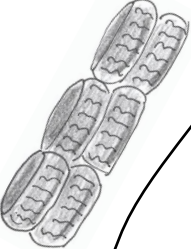
5+15

12+7

10+10

2+18

4+14



16+4

4+16

14+5

15+3

12+8

18+1