

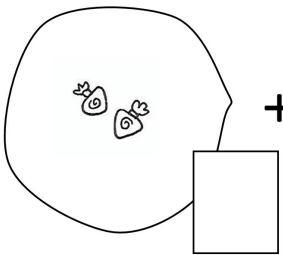
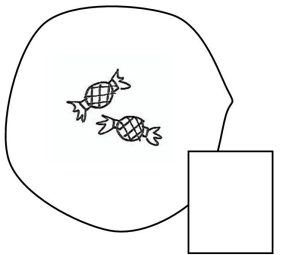
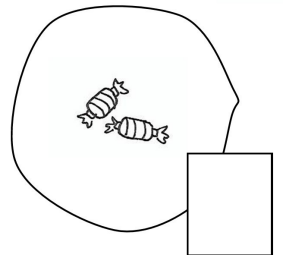
Hvor mange karameller får SNEMANDEN?

Skriv tallene i rubrikkerne.



©www.printland.dk

Mathematical problem for the snowman: Three large circles containing different quantities of candies are added together, followed by an equals sign and a large empty box for the answer.

 +  +  =



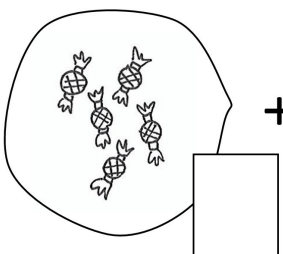
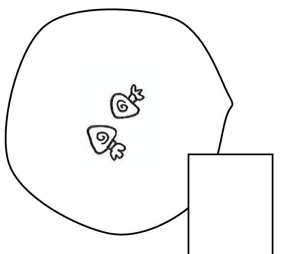
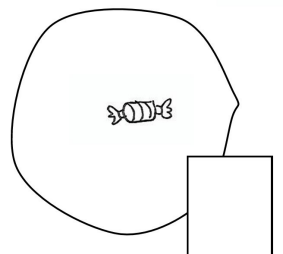
Hvor mange karameller får SLAGEN?

Skriv tallene i rubrikkerne.



©www.printland.dk

Mathematical problem for the girl: Three large circles containing different quantities of candies are added together, followed by an equals sign and a large empty box for the answer.

 +  +  =