
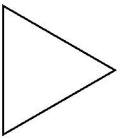
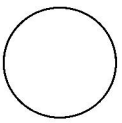


Hvor mange store cirkler  
& trekanter kan der  
være i lastbilien?

Skriv tallet



Hvor mange store cirkler  
& firkanter kan der  
være i lastbilien?

Skriv tallet

