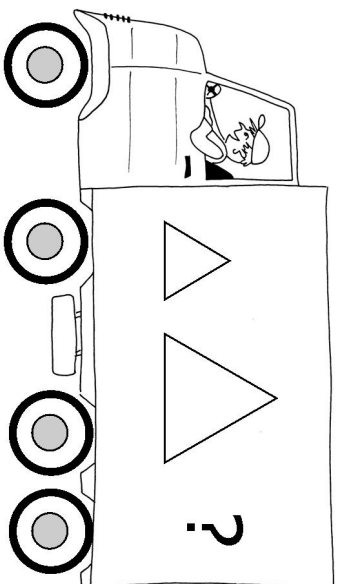


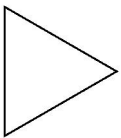

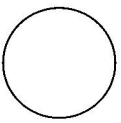


Hvor mange store cirkler  
trekanter & firkanter kan  
der være i lastbilen?

Skriv tallet



Hvor mange små & store  
trekanter kan der være i  
lastbilen?

Skriv tallet

