






Hvor langt er der til hønemors kyllinger?

Skriv målene og læg sammen

Ark 4

Ark 5

Ark 6

	$\begin{array}{r} + \\ \hline \text{cm} \\ \hline \hline \end{array}$	$\begin{array}{r} + \\ \hline \text{cm} \\ \hline \hline \end{array}$	$\begin{array}{r} + \\ \hline \text{cm} \\ \hline \hline \end{array}$
	$\begin{array}{r} + \\ \hline \text{cm} \\ \hline \hline \end{array}$	$\begin{array}{r} + \\ \hline \text{cm} \\ \hline \hline \end{array}$	$\begin{array}{r} + \\ \hline \text{cm} \\ \hline \hline \end{array}$
	$\begin{array}{r} + \\ \hline \text{cm} \\ \hline \hline \end{array}$	$\begin{array}{r} + \\ \hline \text{cm} \\ \hline \hline \end{array}$	$\begin{array}{r} + \\ \hline \text{cm} \\ \hline \hline \end{array}$
	$\begin{array}{r} + \\ \hline \text{cm} \\ \hline \hline \end{array}$	$\begin{array}{r} + \\ \hline \text{cm} \\ \hline \hline \end{array}$	$\begin{array}{r} + \\ \hline \text{cm} \\ \hline \hline \end{array}$
	$\begin{array}{r} + \\ \hline \text{cm} \\ \hline \hline \end{array}$	$\begin{array}{r} + \\ \hline \text{cm} \\ \hline \hline \end{array}$	$\begin{array}{r} + \\ \hline \text{cm} \\ \hline \hline \end{array}$