
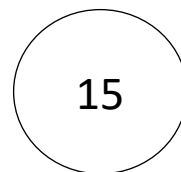

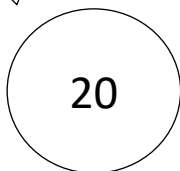

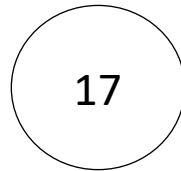




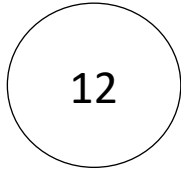

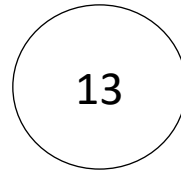
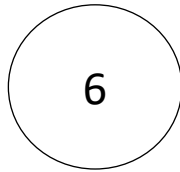




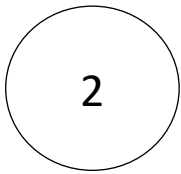

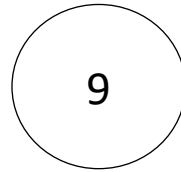




Sjov med dino 6



Hvor mange tænder kan du se?	
Hvor mange takker kan du se?	
Hvor mange pletter kan du se?	
Hvor mange ben kan du se?	
Hvor mange negle kan du se?	
Hvor mange haler kan du se?	
Hvor mange rynker kan du se?	

Hjælp dino med at finde vej til maden fra 1 til 20.



Hjælp dino med at sætte ring om det tal der er størst?

18 eller 12

14 eller 15

16 eller 20

19 eller 17


9 eller 8

10 eller 13

17 eller 18


11 eller 8

12 eller 19



Læg sammen

$7 + 12 =$		$5 + 8 =$	
$9 + 6 =$		$4 + 7 =$	
$11 + 9 =$		$9 + 8 =$	




Navn:

$3 + 11 =$		$3 + 7 =$	
$10 + 8 =$		$12 + 4 =$	
$14 + 6 =$		$7 + 5 =$	

Træk fra

$18 - 5 =$		$12 - 3 =$	
$14 - 12 =$		$16 - 10 =$	
$20 - 19 =$		$10 - 2 =$	



Navn:

$17 - 3 =$		$13 - 8 =$	
$11 - 8 =$		$15 - 8 =$	
$19 - 4 =$		$20 - 2 =$	